





Math Exercises

Solve the following mathematical operations


Remember! scan the QR code for to check
the correct result

$$\begin{array}{r} + 52 \\ 16 \\ \hline \end{array}$$



1

$$\begin{array}{r} + 18 \\ 63 \\ \hline \end{array}$$



2

$$\begin{array}{r} + 70 \\ 21 \\ \hline \end{array}$$



3

$$\begin{array}{r} + 19 \\ 47 \\ \hline \end{array}$$



4

$$\begin{array}{r} + 10 \\ 29 \\ \hline \end{array}$$



5

$$\begin{array}{r} + 55 \\ 10 \\ \hline \end{array}$$



6

$$\begin{array}{r} + 42 \\ 32 \\ \hline \end{array}$$



7

$$\begin{array}{r} + 28 \\ 65 \\ \hline \end{array}$$



8

$$\begin{array}{r} + 30 \\ 43 \\ \hline \end{array}$$



9

$$\begin{array}{r} + 19 \\ 10 \\ \hline \end{array}$$



10

$$\begin{array}{r} + 71 \\ 11 \\ \hline \end{array}$$



11

$$\begin{array}{r} + 17 \\ 23 \\ \hline \end{array}$$



12

$$\begin{array}{r} + 37 \\ 17 \\ \hline \end{array}$$



13

$$\begin{array}{r} + 18 \\ 63 \\ \hline \end{array}$$



14

$$\begin{array}{r} + 32 \\ 39 \\ \hline \end{array}$$



15

$$\begin{array}{r} + 60 \\ 19 \\ \hline \end{array}$$



16

$$\begin{array}{r} + 48 \\ 10 \\ \hline \end{array}$$



17

$$\begin{array}{r} + 15 \\ 28 \\ \hline \end{array}$$



18

$$\begin{array}{r} 69 \\ - 51 \\ \hline \end{array}$$



19

$$\begin{array}{r} 47 \\ - 17 \\ \hline \end{array}$$



20

$$\begin{array}{r} 20 \\ - 12 \\ \hline \end{array}$$



21

$$\begin{array}{r} 78 \\ - 42 \\ \hline \end{array}$$


22

$$\begin{array}{r} 55 \\ - 38 \\ \hline \end{array}$$


23

$$\begin{array}{r} 93 \\ - 13 \\ \hline \end{array}$$


24

$$\begin{array}{r} 22 \\ - 16 \\ \hline \end{array}$$



25

$$\begin{array}{r} 83 \\ - 63 \\ \hline \end{array}$$



26

$$\begin{array}{r} 17 \\ - 05 \\ \hline \end{array}$$



27

$$\begin{array}{r} 42 \\ - 16 \\ \hline \end{array}$$



28

$$\begin{array}{r} 38 \\ - 19 \\ \hline \end{array}$$



29

$$\begin{array}{r} 50 \\ - 21 \\ \hline \end{array}$$



30

$$\begin{array}{r} 72 \\ - 26 \\ \hline \end{array}$$



31

$$\begin{array}{r} 67 \\ - 65 \\ \hline \end{array}$$



32

$$\begin{array}{r} 90 \\ - 82 \\ \hline \end{array}$$



33

$$\begin{array}{r} 52 \\ - 17 \\ \hline \end{array}$$



34

$$\begin{array}{r} 99 \\ - 29 \\ \hline \end{array}$$



35

$$\begin{array}{r} 70 \\ - 52 \\ \hline \end{array}$$



36